



EJERCICIOS DE MATEMÁTICA



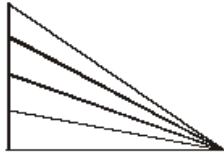
Descarga Gratis Fichas de Matemática para Inicial, primaria y Secundaria

Conteo de Triángulos

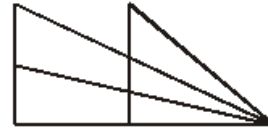
PRACTIQUEMOS:

➤ Encuentra la máxima cantidad de triángulos en las siguientes figuras.

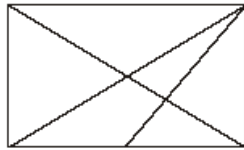
01.



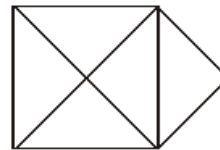
05.



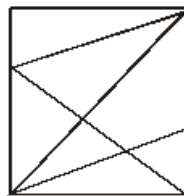
02.



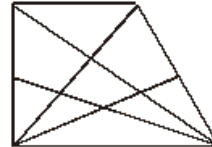
06.



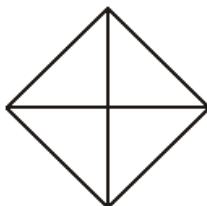
03.



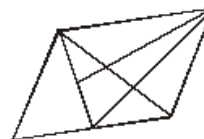
07.



04.



08.

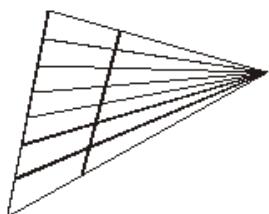


RAZONAMIENTO MATEMÁTICO

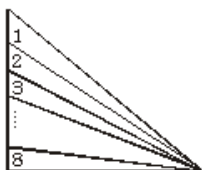
Sexto Grado de Primaria

Continuemos Practicando:

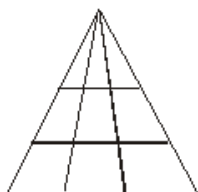
01.



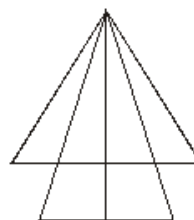
02.



03.



04.



05.

