



EJERCICIOS DE MATEMÁTICA



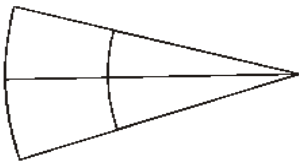
Descarga Gratis Fichas de Matemática para Inicial, primaria y Secundaria

Conteo de Sectores Circulares

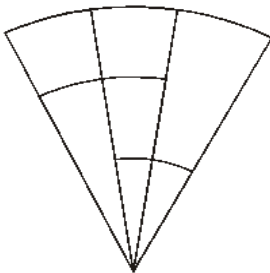
PRACTIQUEMOS:

- Encuentra la cantidad de sectores circulares que hay en cada figura.

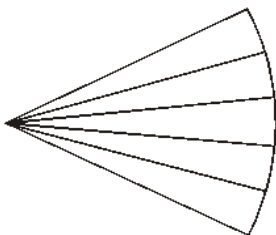
01.



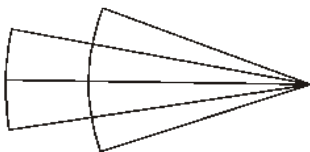
02.



03.



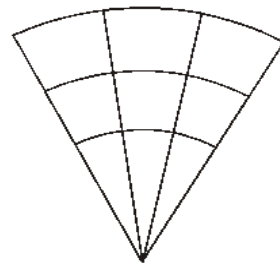
04.



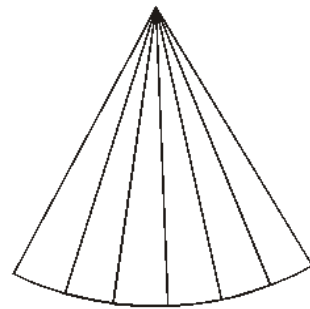
05.



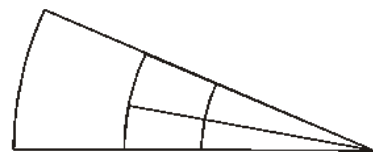
06.



07.



08.



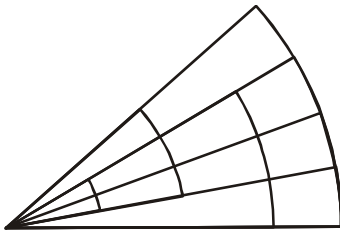
RAZONAMIENTO MATEMÁTICO

Sexto Grado de Primaria

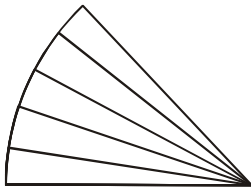
Resuelve en Casa:

Encuentra el total de sectores circulares en las siguientes figuras:

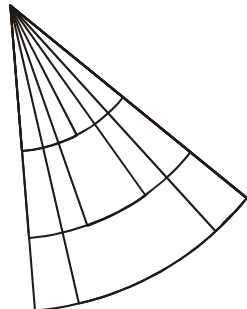
01.



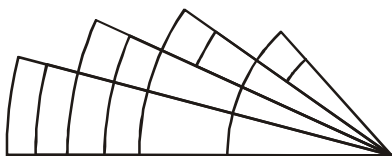
02.



03.

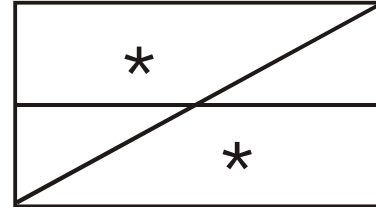


04.



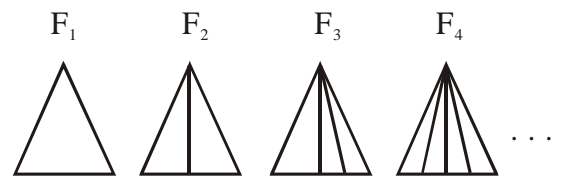
Reforzando mis conocimientos:

01. ¿Cuántos cuadriláteros que tengan asteriscos hay?



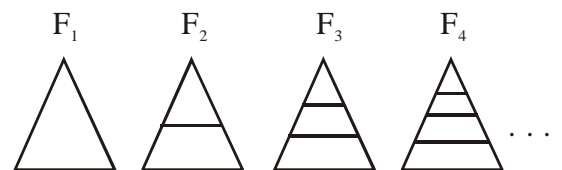
Rpta: _____

02. ¿Cuántos triángulos hay en la F_{100} ?



Rpta: _____

03. ¿Cuántos triángulos hay en F_{100} ?



Rpta: _____